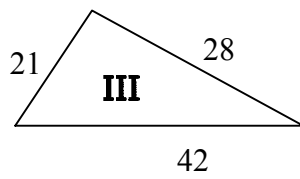
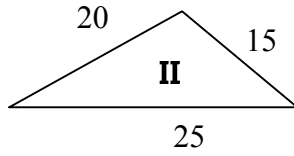
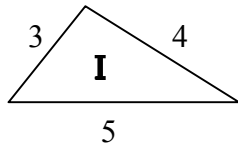


16. Which of the following are similar triangles?



- E) **I** and **II**
- F) **I** and **III**
- G) **II** and **III**
- H) **I** and **II** and **III**